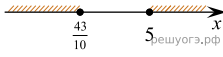
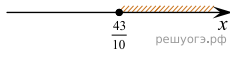


Укажите решение системы неравенств $\begin{cases} x - 4,3 \geq 0, \\ x + 5 \leq 10? \end{cases}$

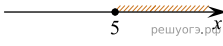
1)



2)



3)



4)

