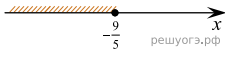
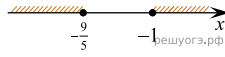


Укажите решение системы неравенств  $\begin{cases} x + 1,8 \leq 0, \\ x + 0,5 \leq -0,5? \end{cases}$

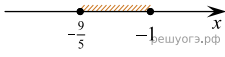
1)



2)



3)



4)

